



# Noah's Ark Independent Primary School

Subject: History	Examiner: Matongo, N.
Type: End of Year Exam	Moderator: Rwizi, A
Date: 13 November 2019	Grade: 4-_____
Marks: 50 Marks	Time: 1 hour 15 minutes

Name: \_\_\_\_\_

## Instructions:

Answer ALL the questions in the spaces provided.

Write neatly and legibly

Carefully read all questions before answering

## Section A: Local history

1. List the four ways people can find out about a place. (4)

-----

-----

-----

-----

2. Study the source below and answer the questions that follow.



Rock paintings in the uKhahlamba-Drakensberg

2.1 From which place were these rock paintings found? (1)

-----

2.2 Which people could have drawn these paintings? (1)

-----

2.3 What important information can we gather from this source about the San people's life? (2)

-----

-----

2.4 Explain what the San people used the following tools for. (3)



A. an axe



B. a scraper



C. a knife

a. An axe -----

b. A spear -----

c. A knife -----

3. Give four examples of good qualities of a leader. (4)

-----

-----

-----

-----

4. Read the source below and answer the questions that follow.

### **Nelson Mandela**

Nelson Mandela was born on 18 July 1918 in Mvezo in the Transkei. His parents called him Dalibhunga Rolihlahla Mandela. His teachers gave him the name 'Nelson' much later on. Mandela spent his early childhood in the rural village of Qunu near Mthatha in the Eastern Cape. He worked as a herd boy and attended the local mission school. In his free time he played with the other village boys: swimming in the streams, building toys from mud and stick-fighting. In the evening the family ate a meal cooked over an open fire, before going to sleep in their hut built from mud and thatch.



The village of Qunu.

4.1 When was Nelson Mandela born? (1)

-----

4.2 How did he get his name "Nelson"? (2)

-----

-----

4.3 Explain the meaning of the name "Rolihlahla" and how Nelson lived up to his indigenous name. (3)

-----

-----

-----

5. The events in the timeline below are in the wrong order.

Re-arrange the events in the correct order to complete a

timeline of Mohandas Gandhi's life. (6)

1869 – He returned to India to help India become independent from British rule.

- Gandhi got married. He was 13 years old and still at school.
- Gandhi arrived in South Africa to work as a lawyer.
- Mohandas was assassinated (killed) in 1948 because of his ideas about fairness and tolerance.
- Gandhi left South Africa after living here for 21 years.

1948- Mohandas Gandhi was born in India in 1869.

---

---

---

---

---

---

---

---

## Section B: Transport through time

1. Study the pictures below and answer questions that follow.



1.1 Name the kinds of bicycles. (3)

A \_\_\_\_\_

B \_\_\_\_\_

C \_\_\_\_\_

1.2 Explain two things the safety bicycle had that were not part of earlier bicycles. (3)

\_\_\_\_\_

\_\_\_\_\_

\_\_\_\_\_

1.3 What was the first successful flying machine called? (1)

\_\_\_\_\_

1.4 Who made the first aeroplane? (1)

\_\_\_\_\_

2. Explain the following terms. (2)

Ancestors \_\_\_\_\_

\_\_\_\_\_




Communicating -----  
-----

3. How did people long ago communicate? (3)

-----  
-----  
-----

4. Explain the invention made by Samuel Morse . (1)

-----

5. The Morse code for A is , S is  and R is   
Use this information to interpret the following message: (3)



-----

6. Complete the following sentences by choosing the correct word between the brackets. (2)

6.1 Early cameras were -----  
(expensive/ cheap)

6.2 A kodak camera -----(keeps / loses)  
pictures.

7. Explain why the personal computer would be called all in one. (3)

-----  
-----